



RADIANT ENGLISH ACADEMY

NR. RELIANCE TOWNSHIP, PIPLOD, SURAT 7. PHONE: 2721730 / TELE FAX: 0261-2720165


PRACTICE SHEET – 5

SUBJECT : Maths

Worksheet-5

Q.1 Name the shapes of given objects.












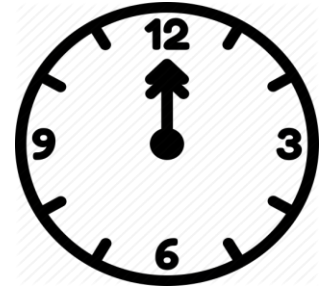

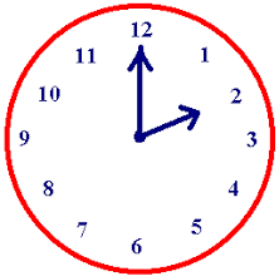








Q.2 Write time shown in the clock.



Q.3 Draw a clock ,show your own time and colour it.



RADIANT ENGLISH ACADEMY

NR. RELIANCE TOWNSHIP, PIPLOD, SURAT 7. PHONE: 2721730 / TELE FAX: 0261-2720165

PRACTICE SHEET – 6

SUBJECT : Maths

Q.1 Word problems.

1) 64 children are watching a film. 34 more children join them. How many children are now watching the film?

Tens	Ones

2) In a cricket match Rohan scored 32 runs in the first innings and 66 runs in the second innings. How many runs did he score in all?

Tens	Ones

3) There are 34 girls and 22 boys in a class. How many more girls are there than boys?

Tens	Ones

4) 86 birds are sitting
on a tree. 24 birds
fly away. How many
birds are left on the
tree ?

	Tens	Ones
<input type="text"/>		